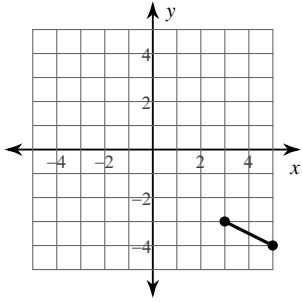


Assignment

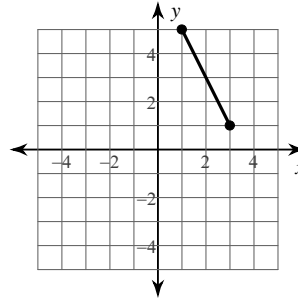
Find the distance between each pair of points. Round your answer to the nearest tenth, if necessary.

1)



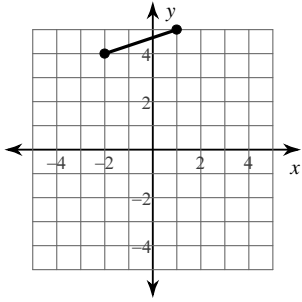
- A) 3.9
- B) 2.2
- C) 1.7
- D) 10.6

2)



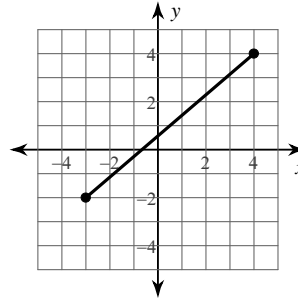
- A) 10.6
- B) 4.5
- C) 2.4
- D) 9.2

3)



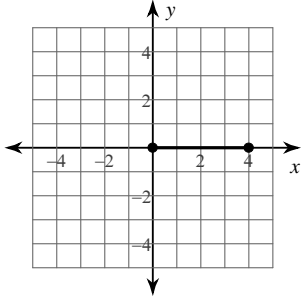
- A) 9.1
- B) 8.9
- C) 2
- D) 3.2

4)



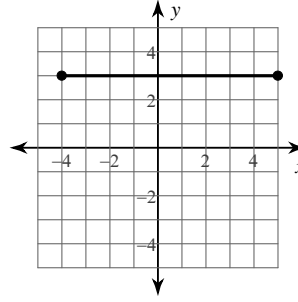
- A) 3.6
- B) 9.2
- C) 1
- D) 2.2

5)



- A) 4
- B) 9
- C) 7.1
- D) 2

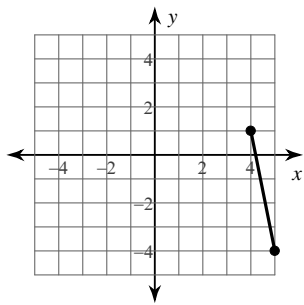
6)



- A) 6.1
- B) 3
- C) 5.9
- D) 9

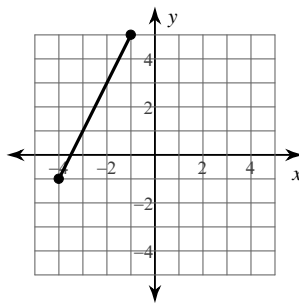


7)



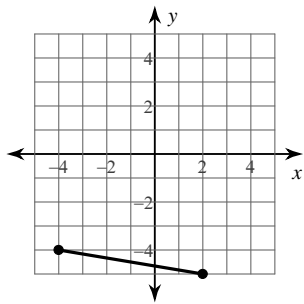
- A) 3.5 B) 5.1
C) 2.4 D) 9.5

8)



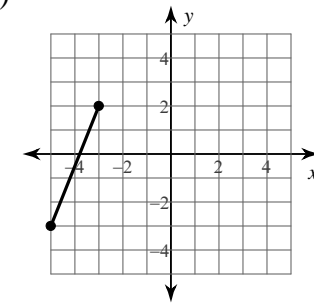
- A) 6.7 B) 7.6
C) 3 D) 6.4

9)



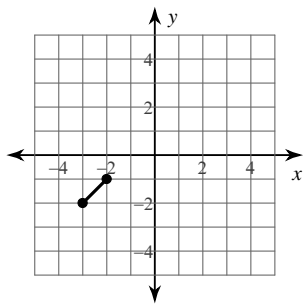
- A) 8.8 B) 6.1
C) 2.6 D) 2.2

10)



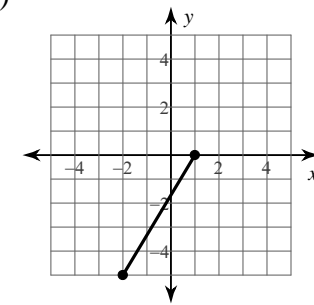
- A) 8.1 B) 5.4
C) 2.6 D) 7.9

11)



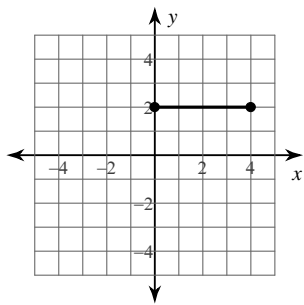
- A) 4 B) 1.4
C) 8.1 D) 5.8

12)



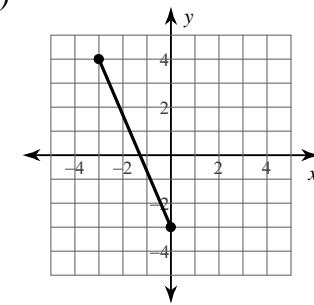
- A) 5.1 B) 2
C) 5.8 D) 2.8

13)



- A) 5.7 B) 5
C) 2 D) 4

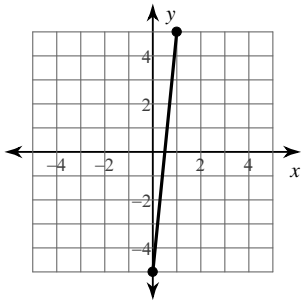
14)



- A) 7.6 B) 2.8
C) 3.2 D) 2.2

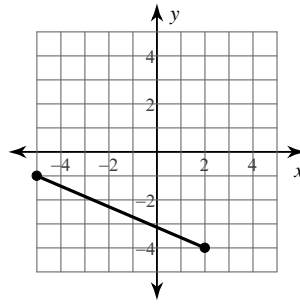


15)



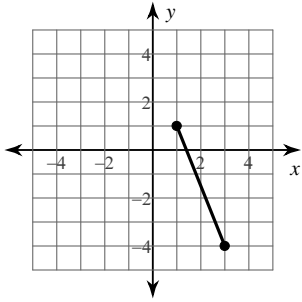
- A) 3 B) 1
C) 10.1 D) 3.3

16)



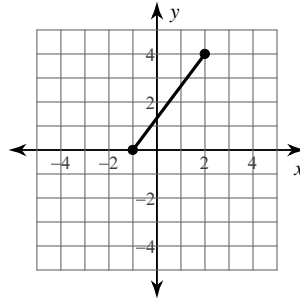
- A) 5.8 B) 3.2
C) 4 D) 7.6

17)



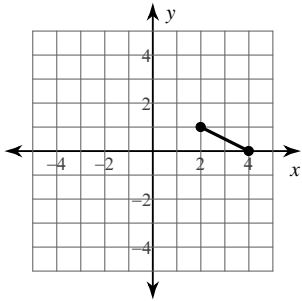
- A) 5.4 B) 5
C) 3 D) 2.6

18)



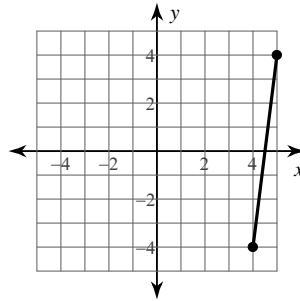
- A) 4.1 B) 5
C) 2.6 D) 1.7

19)



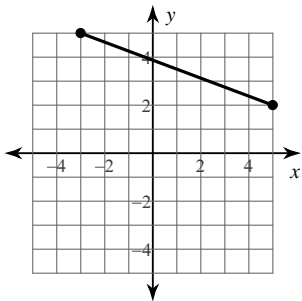
- A) 11.4 B) 5.9
C) 1.7 D) 2.2

20)



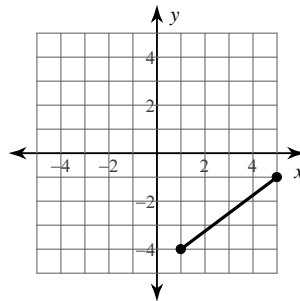
- A) 9 B) 4.2
C) 3 D) 8.1

21)



- A) 2 B) 8.5
C) 7.3 D) 3.3

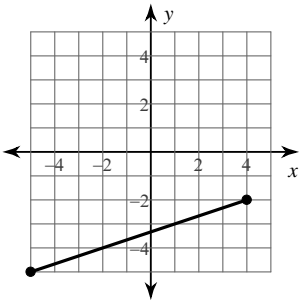
22)



- A) 7.8 B) 5
C) 3.3 D) 2.6

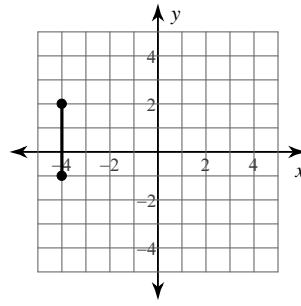


23)



- A) 7.1
- B) 3.5
- C) 9.5
- D) 2.4

24)



- A) 7.9
- B) 8.1
- C) 3
- D) 1.7



Answers to Assignment (ID: 1)

1) B
5) A
9) B
13) D
17) A
21) B

2) B
6) D
10) B
14) A
18) B
22) B

3) D
7) B
11) B
15) C
19) D
23) C

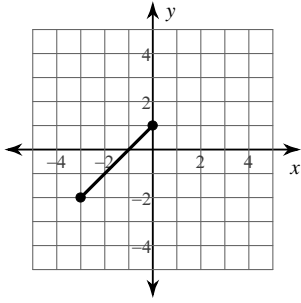
4) B
8) A
12) C
16) D
20) D
24) C



Assignment

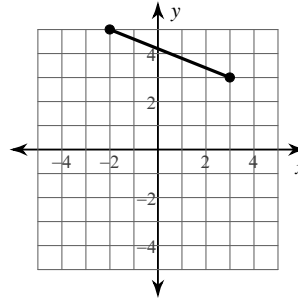
Find the distance between each pair of points. Round your answer to the nearest tenth, if necessary.

1)



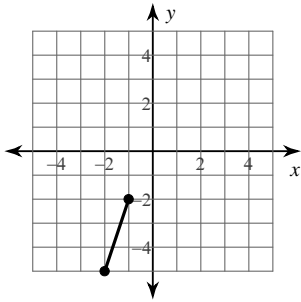
- A) 2.8
- B) 2.4
- C) 1.4
- D) 4.2

2)



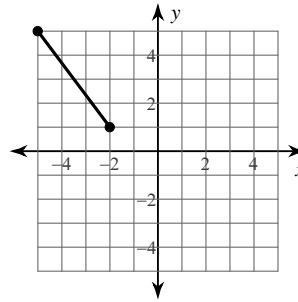
- A) 2.6
- B) 8.1
- C) 7.9
- D) 5.4

3)



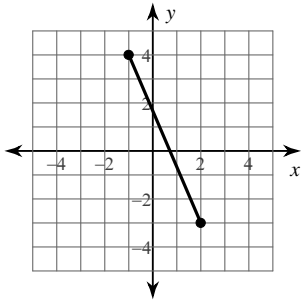
- A) 6.3
- B) 3.2
- C) 7.6
- D) 2

4)



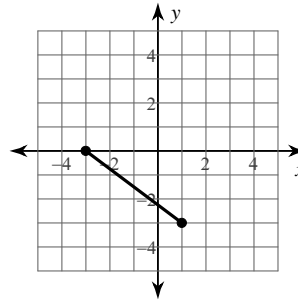
- A) 9.2
- B) 5
- C) 3.6
- D) 2.6

5)



- A) 7.6
- B) 3.2
- C) 3.6
- D) 2

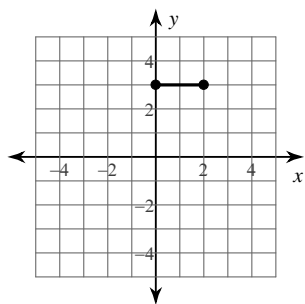
6)



- A) 5
- B) 8.1
- C) 2.6
- D) 2.2

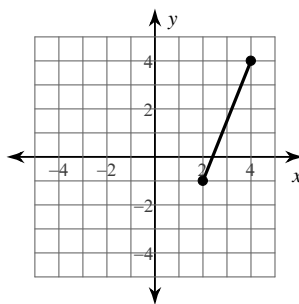


7)



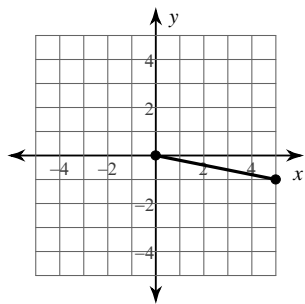
- A) 5.7 B) 6.3
C) 2 D) 1.4

8)



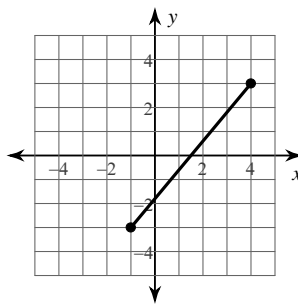
- A) 1.7 B) 5.4
C) 2.6 D) 6.7

9)



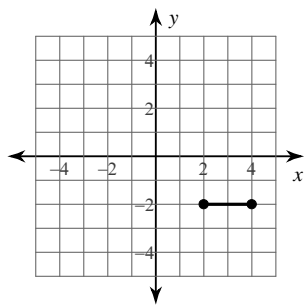
- A) 2.4 B) 3.2
C) 5.1 D) 8.5

10)



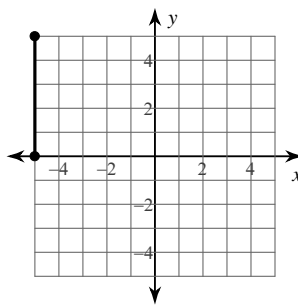
- A) 7.8 B) 3.3
C) 1.7 D) 5

11)



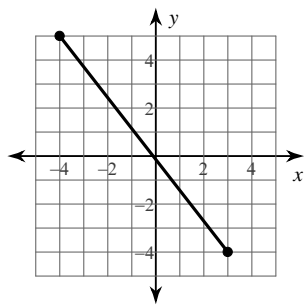
- A) 2 B) 1.4
C) 3.2 D) 7.2

12)



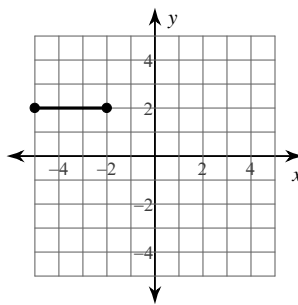
- A) 2.2 B) 3.9
C) 5 D) 11.2

13)



- A) 1.4 B) 11.4
C) 8.2 D) 4

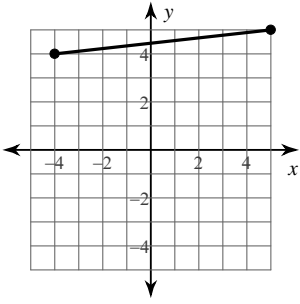
14)



- A) 3.3 B) 3
C) 1.7 D) 8.1

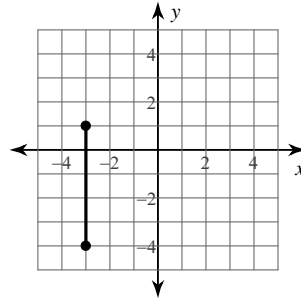


15)



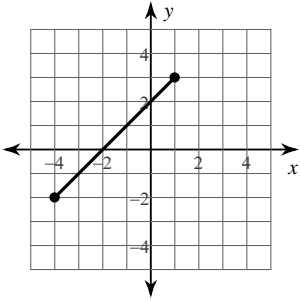
- A) 9.1 B) 3.2
C) 2.8 D) 8.9

16)



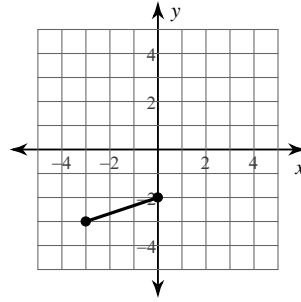
- A) 8.5 B) 5
C) 2.2 D) 3

17)



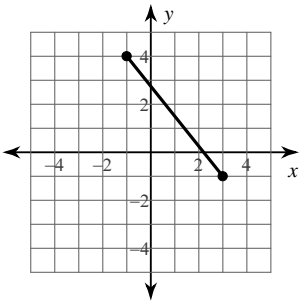
- A) 7.1 B) 3.2
C) 2 D) 2.8

18)



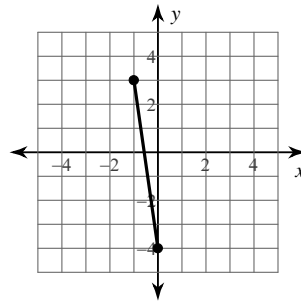
- A) 2 B) 1.4
C) 5.8 D) 3.2

19)



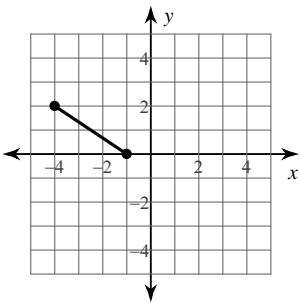
- A) 6.4 B) 3.6
C) 2.2 D) 3

20)



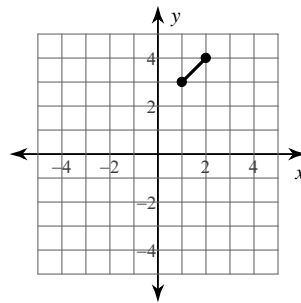
- A) 5.1 B) 7.1
C) 2.8 D) 2.2

21)



- A) 2.6 B) 3.6
C) 5.4 D) 2.2

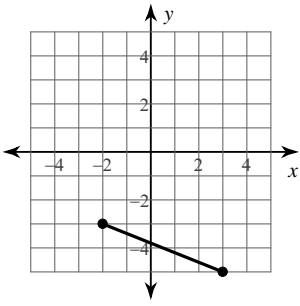
22)



- A) 1.4 B) 2
C) 7.6 D) 6.3

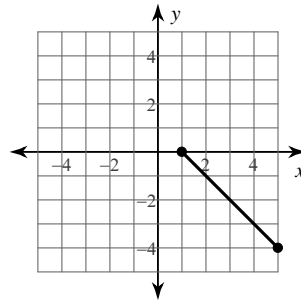


23)



- A) 5.4
- B) 8.1
- C) 2.6
- D) 3

24)



- A) 5.7
- B) 7.2
- C) 2.8
- D) 3.2



Answers to Assignment (ID: 2)

- 1) D
- 5) A
- 9) C
- 13) B
- 17) A
- 21) B

- 2) D
- 6) A
- 10) A
- 14) B
- 18) D
- 22) A

- 3) B
- 7) C
- 11) A
- 15) A
- 19) A
- 23) A

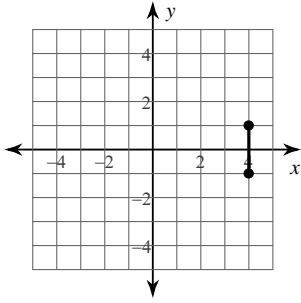
- 4) B
- 8) B
- 12) C
- 16) B
- 20) B
- 24) A



Assignment

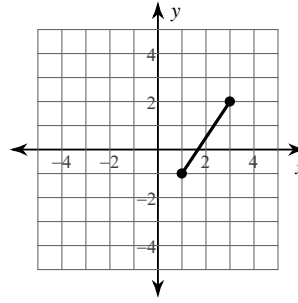
Find the distance between each pair of points. Round your answer to the nearest tenth, if necessary.

1)



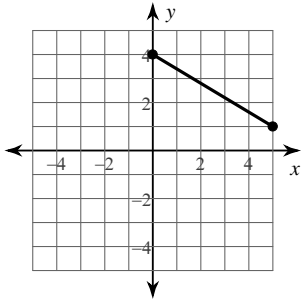
- A) 2
- B) 2.8
- C) 8
- D) 1.4

2)



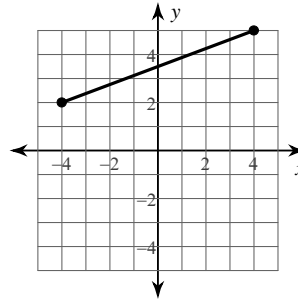
- A) 2.2
- B) 3.6
- C) 1.7
- D) 4.1

3)



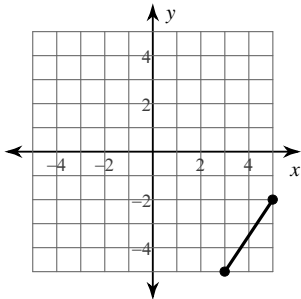
- A) 5.8
- B) 2.8
- C) 3.6
- D) 7.1

4)



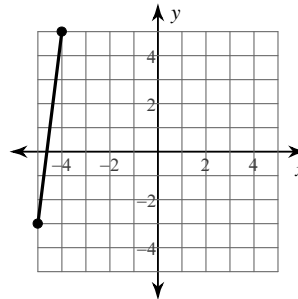
- A) 8.5
- B) 3.3
- C) 2.6
- D) 7

5)



- A) 3.6
- B) 2.2
- C) 3.9
- D) 10.6

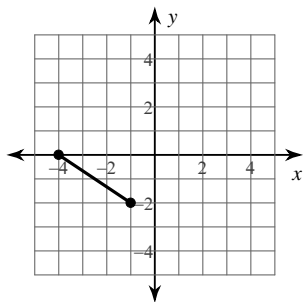
6)



- A) 8.1
- B) 9.2
- C) 3
- D) 3.3

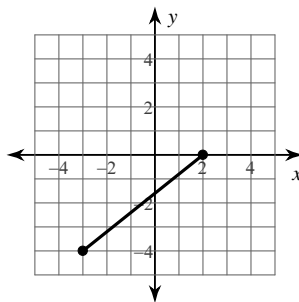


7)



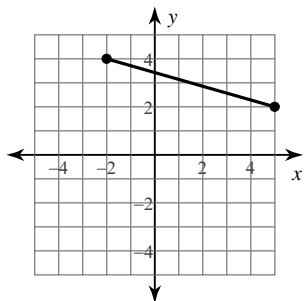
- A) 3.6 B) 4.6
C) 2.2 D) 5.4

8)



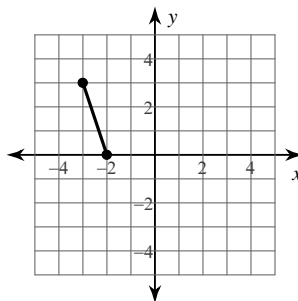
- A) 4.1 B) 6.4
C) 1.7 D) 3

9)



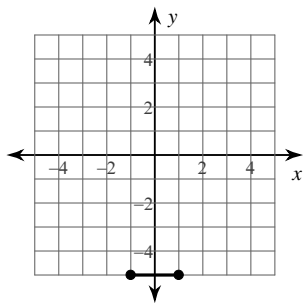
- A) 7.3 B) 6.7
C) 3 D) 5.2

10)



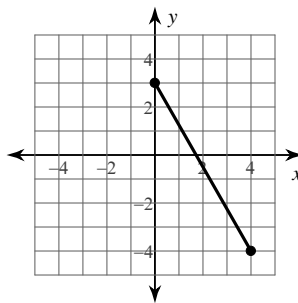
- A) 3.2 B) 5.8
C) 2.8 D) 2

11)



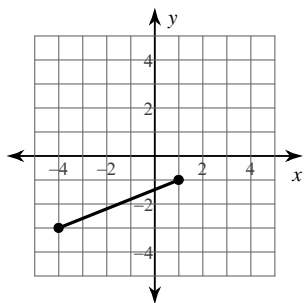
- A) 2 B) 1.4
C) 3.2 D) 10

12)



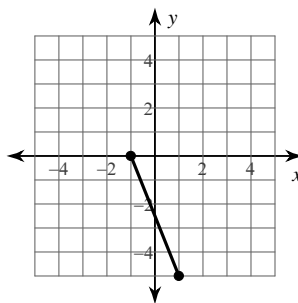
- A) 8.1 B) 3.3
C) 3.9 D) 4.1

13)



- A) 4.1 B) 1.7
C) 2.6 D) 5.4

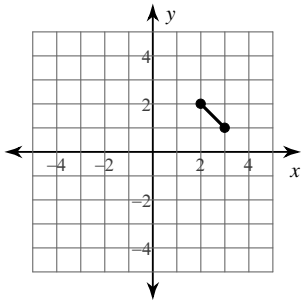
14)



- A) 2.6 B) 5.4
C) 2.2 D) 5

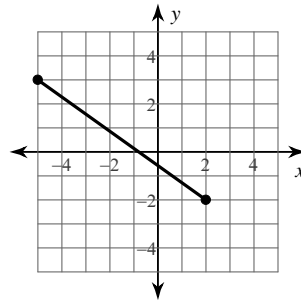


15)



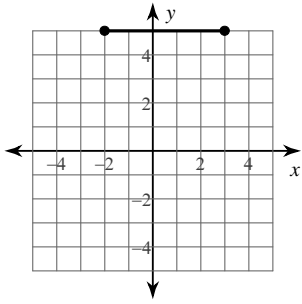
- A) 4.2 B) 1.4
C) 4 D) 5.8

16)



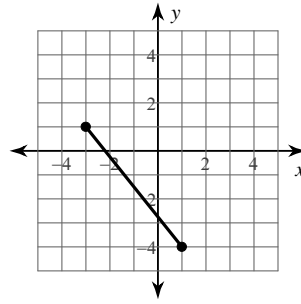
- A) 3.5 B) 2.8
C) 5.8 D) 8.6

17)



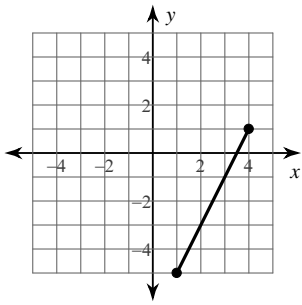
- A) 2.2 B) 5
C) 3 D) 10.1

18)



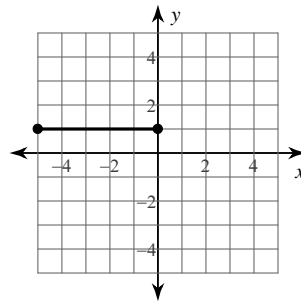
- A) 2.2 B) 3
C) 6.4 D) 3.6

19)



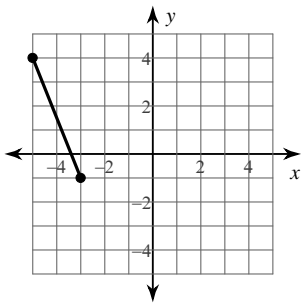
- A) 3 B) 6.4
C) 6.7 D) 3.2

20)



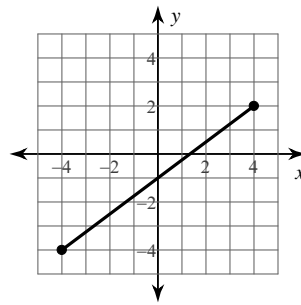
- A) 5 B) 2.6
C) 5.4 D) 2.2

21)



- A) 2.6 B) 8.5
C) 5.4 D) 3.3

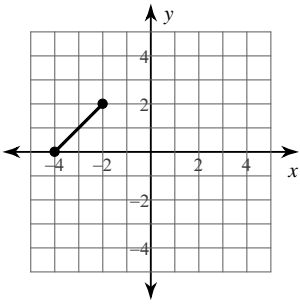
22)



- A) 3.7 B) 1.4
C) 10 D) 2

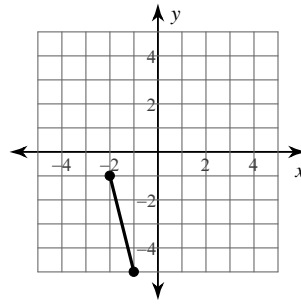


23)



- A) 2
- B) 2.8
- C) 8.1
- D) 5.7

24)



- A) 2.2
- B) 6.7
- C) 5.2
- D) 4.1



Answers to Assignment (ID: 3)

1) A
5) A
9) A
13) D
17) B
21) C

2) B
6) A
10) A
14) B
18) C
22) C

3) A
7) A
11) A
15) B
19) C
23) B

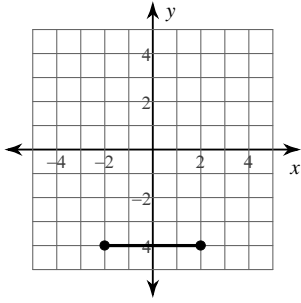
4) A
8) B
12) A
16) D
20) A
24) D



Assignment

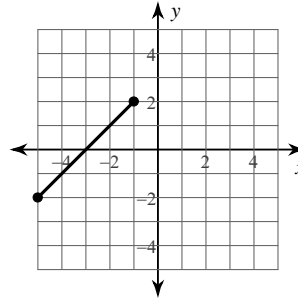
Find the distance between each pair of points. Round your answer to the nearest tenth, if necessary.

1)



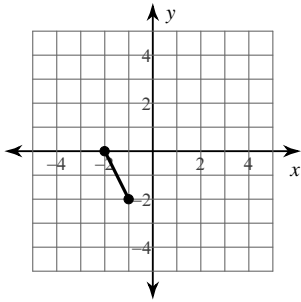
- A) 4
- B) 8
- C) 2.8
- D) 2

2)



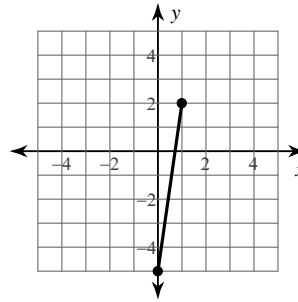
- A) 2.8
- B) 6
- C) 5.7
- D) 2.4

3)



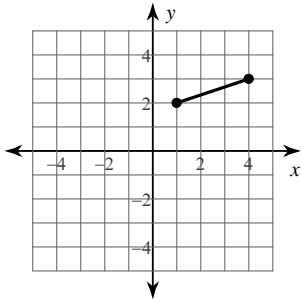
- A) 2.2
- B) 1.7
- C) 7.6
- D) 3.6

4)



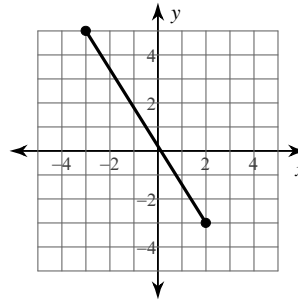
- A) 2.8
- B) 2.4
- C) 7.1
- D) 3.2

5)



- A) 2
- B) 1.4
- C) 3.2
- D) 7.1

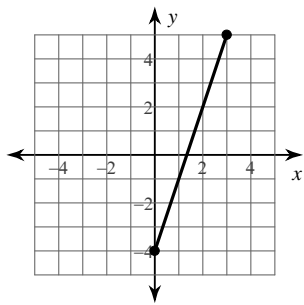
6)



- A) 1.7
- B) 2.8
- C) 3.6
- D) 9.4

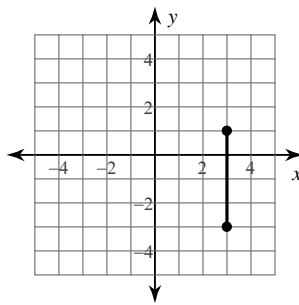


7)



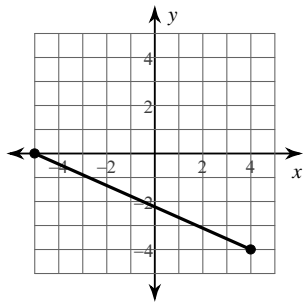
- A) 3.2 B) 9.5
C) 3.5 D) 2.4

8)



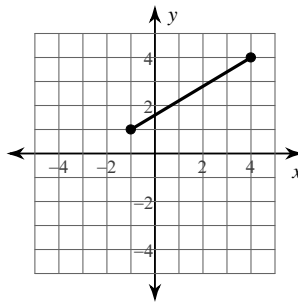
- A) 2.8 B) 2
C) 10.8 D) 4

9)



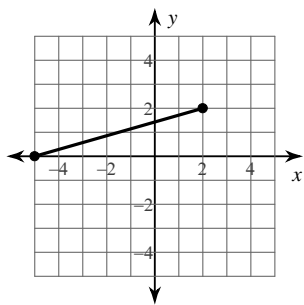
- A) 9.8 B) 4.1
C) 3.6 D) 5.4

10)



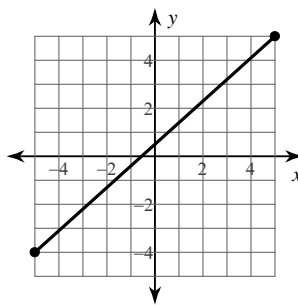
- A) 1.4 B) 2.8
C) 4 D) 5.8

11)



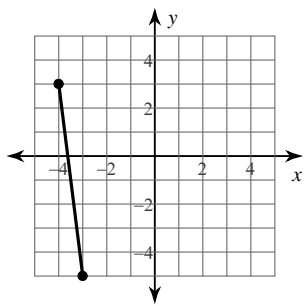
- A) 2.2 B) 7.3
C) 3 D) 3.6

12)



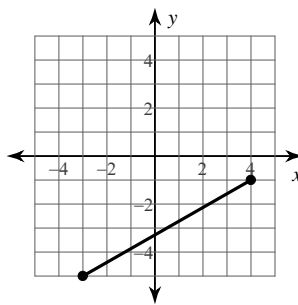
- A) 4.4 B) 3.6
C) 13.5 D) 1

13)



- A) 3 B) 8.1
C) 6.7 D) 7.3

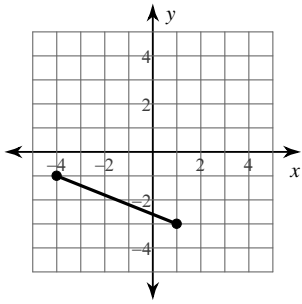
14)



- A) 3.3 B) 6.1
C) 2.6 D) 8.1

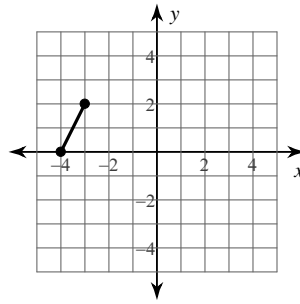


15)



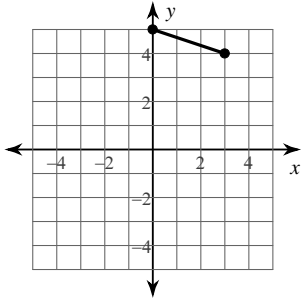
- A) 4.2
- B) 5.4
- C) 5
- D) 2.6

16)



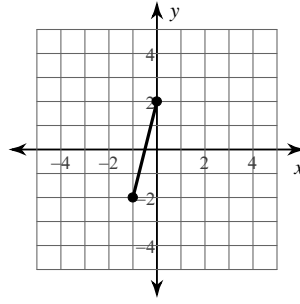
- A) 3
- B) 6.7
- C) 2.2
- D) 1.7

17)



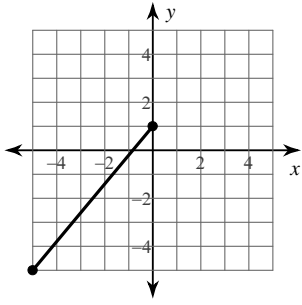
- A) 2.4
- B) 3.2
- C) 2
- D) 8.5

18)



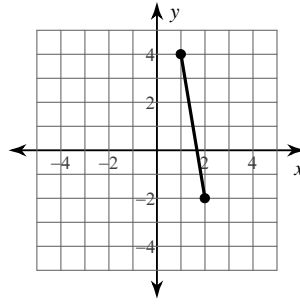
- A) 1.7
- B) 4.1
- C) 2.2
- D) 1

19)



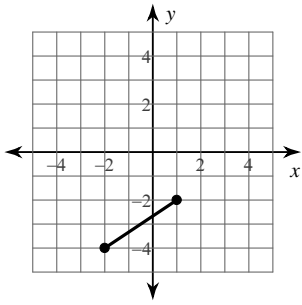
- A) 7.8
- B) 3.3
- C) 1
- D) 6.4

20)



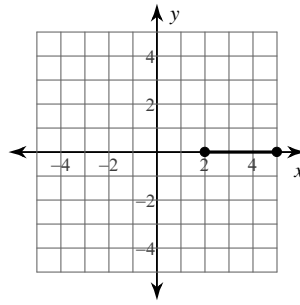
- A) 3.6
- B) 2.6
- C) 2.2
- D) 6.1

21)



- A) 6.1
- B) 2.2
- C) 5.9
- D) 3.6

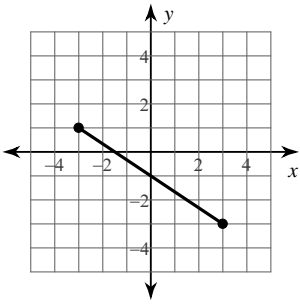
22)



- A) 2.6
- B) 1.7
- C) 3
- D) 7

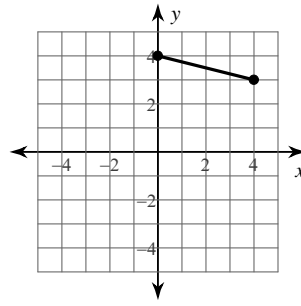


23)



- A) 2
- B) 3.2
- C) 6.3
- D) 7.2

24)



- A) 8.1
- B) 5.7
- C) 4.1
- D) 2.2



Answers to Assignment (ID: 4)

- 1) A
- 5) C
- 9) A
- 13) B
- 17) B
- 21) D

- 2) C
- 6) D
- 10) D
- 14) D
- 18) B
- 22) C

- 3) A
- 7) B
- 11) B
- 15) B
- 19) A
- 23) D

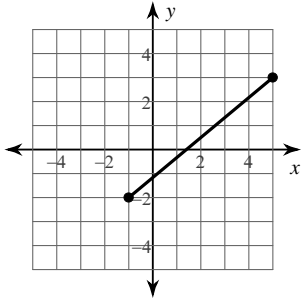
- 4) C
- 8) D
- 12) C
- 16) C
- 20) D
- 24) C



Assignment

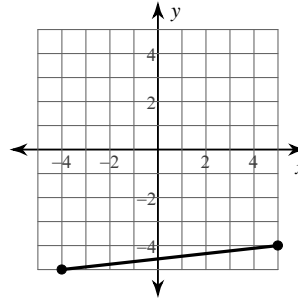
Find the distance between each pair of points. Round your answer to the nearest tenth, if necessary.

1)



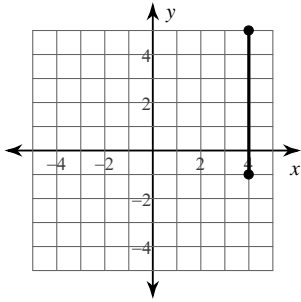
- A) 1.7
- B) 3.3
- C) 4.1
- D) 7.8

2)



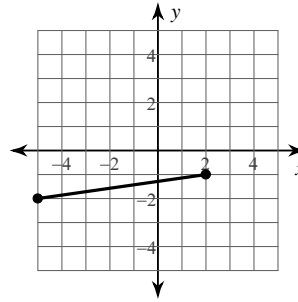
- A) 9.1
- B) 8.1
- C) 3.2
- D) 8.9

3)



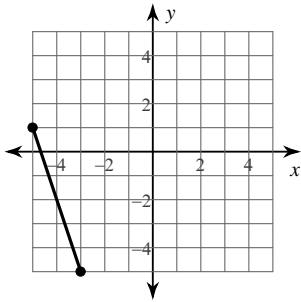
- A) 8.9
- B) 6
- C) 6.9
- D) 2.4

4)



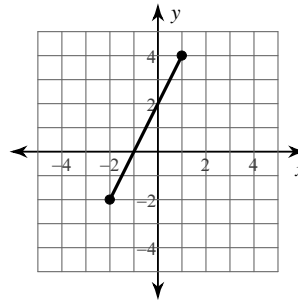
- A) 7.1
- B) 2.8
- C) 9.8
- D) 2.4

5)



- A) 8.9
- B) 6.9
- C) 6.3
- D) 2.8

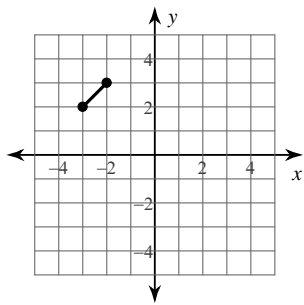
6)



- A) 1.7
- B) 2.2
- C) 3
- D) 6.7

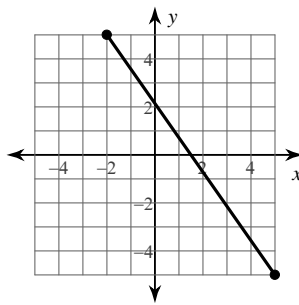


7)



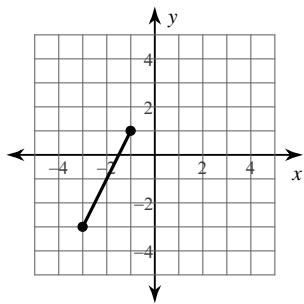
- A) 1.4 B) 7.1
C) 3.2 D) 2.2

8)



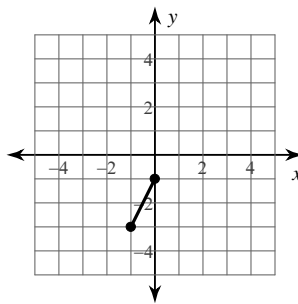
- A) 3 B) 12.2
C) 4.1 D) 2.2

9)



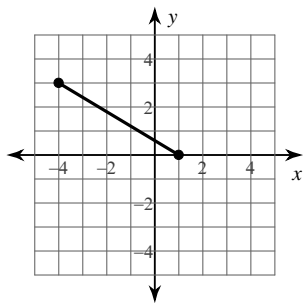
- A) 5.7 B) 2.4
C) 1.4 D) 4.5

10)



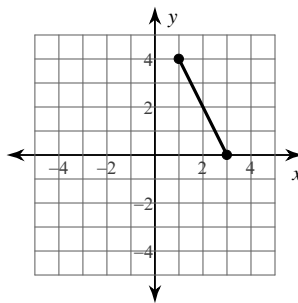
- A) 3.9 B) 1.7
C) 4.1 D) 2.2

11)



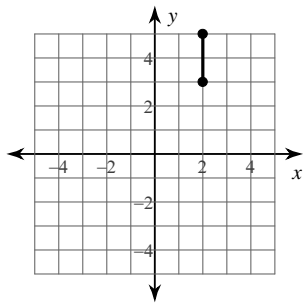
- A) 2.8 B) 5.8
C) 10.2 D) 4.2

12)



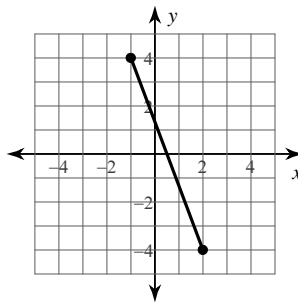
- A) 8.5 B) 5.7
C) 2.4 D) 4.5

13)



- A) 1.4 B) 2
C) 6.9 D) 7.6

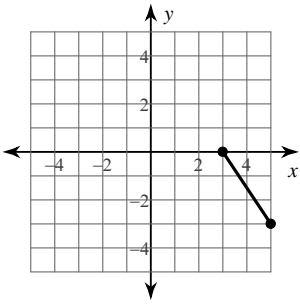
14)



- A) 12.8 B) 1
C) 3.3 D) 8.5

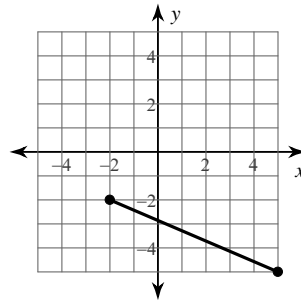


15)



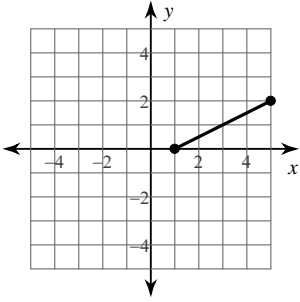
- A) 8.5 B) 3.6
C) 2.2 D) 3.3

16)



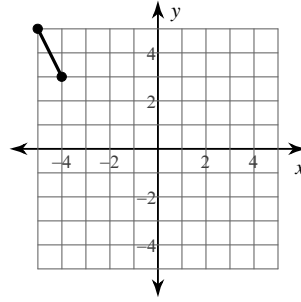
- A) 7.6 B) 7.3
C) 3.2 D) 6.3

17)



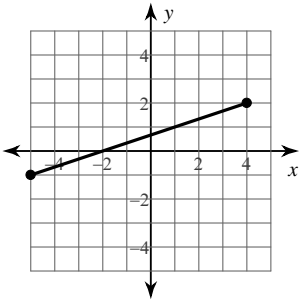
- A) 6.3 B) 2.4
C) 4.5 D) 2

18)



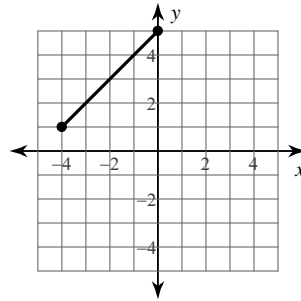
- A) 12 B) 2.2
C) 1.7 D) 4.1

19)



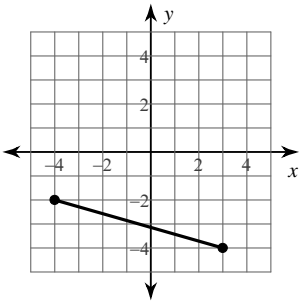
- A) 1.4 B) 9.5
C) 2.4 D) 3.5

20)



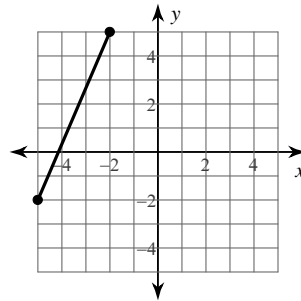
- A) 3.2 B) 2.8
C) 5.7 D) 7.2

21)



- A) 5.9 B) 6.1
C) 7.3 D) 3

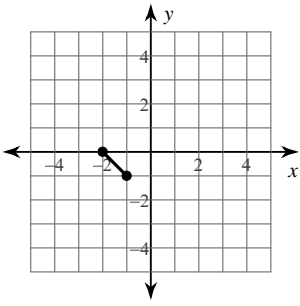
22)



- A) 7.6 B) 9.2
C) 4 D) 3.2

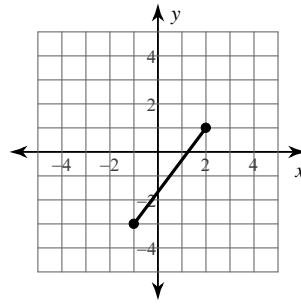


23)



- A) 1.4 B) 2.2
C) 2 D) 3.2

24)



- A) 1.7 B) 2.6
C) 5 D) 2.8



Answers to Assignment (ID: 5)

1) D
5) C
9) D
13) B
17) C
21) C

2) A
6) D
10) D
14) D
18) B
22) A

3) B
7) A
11) B
15) B
19) B
23) A

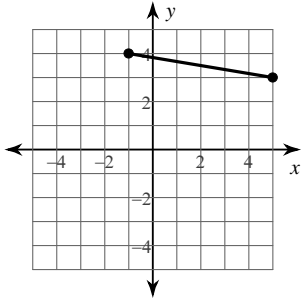
4) A
8) B
12) D
16) A
20) C
24) C



Assignment

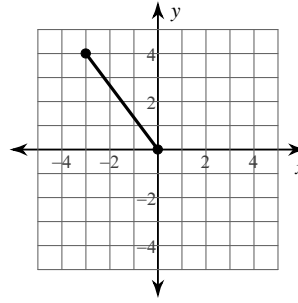
Find the distance between each pair of points. Round your answer to the nearest tenth, if necessary.

1)



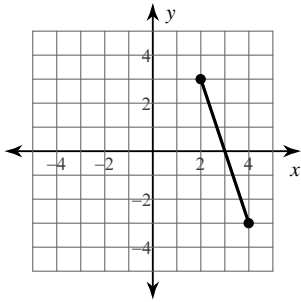
- A) 6.1
- B) 5.7
- C) 2.6
- D) 8.1

2)



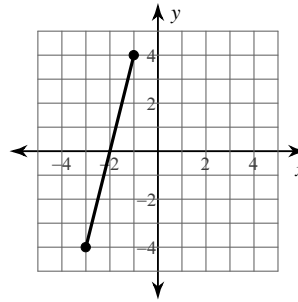
- A) 7.1
- B) 5
- C) 6.4
- D) 2.6

3)



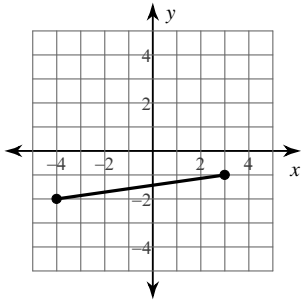
- A) 6.3
- B) 2.8
- C) 2.2
- D) 6

4)



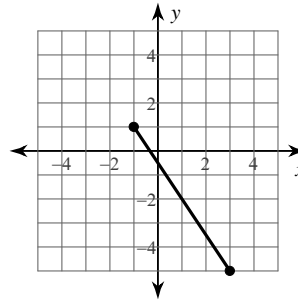
- A) 8.2
- B) 3.2
- C) 2.4
- D) 4

5)



- A) 7.1
- B) 2.8
- C) 2.4
- D) 3.2

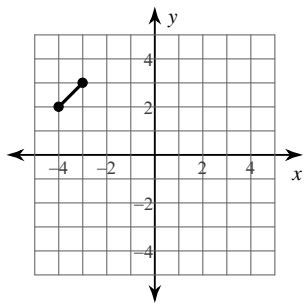
6)



- A) 7.2
- B) 3.2
- C) 4.5
- D) 3.5

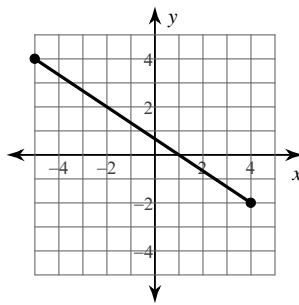


7)



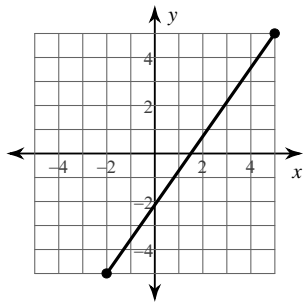
- A) 3.5 B) 8.6
C) 1.4 D) 4.9

8)



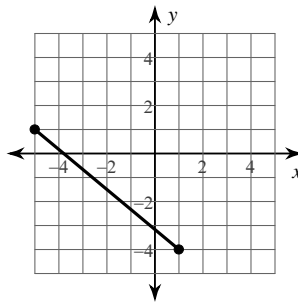
- A) 10.8 B) 1.7
C) 3.9 D) 2.2

9)



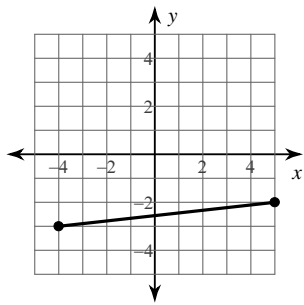
- A) 12.2 B) 1.7
C) 3 D) 4.1

10)



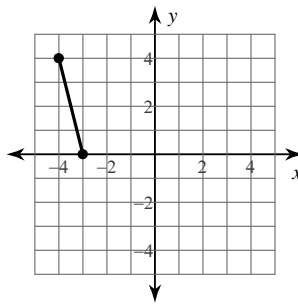
- A) 7.8 B) 5
C) 2.6 D) 3.3

11)



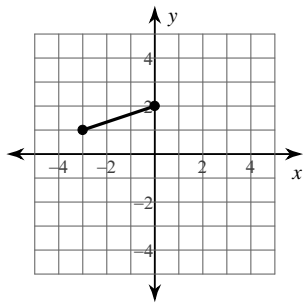
- A) 3.2 B) 9.1
C) 5.1 D) 2.8

12)



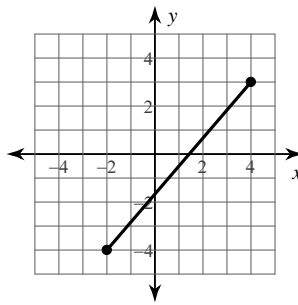
- A) 4.1 B) 2.2
C) 3.3 D) 8.1

13)



- A) 2 B) 3.2
C) 2.4 D) 2.2

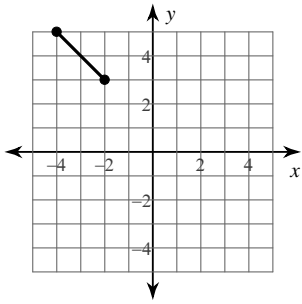
14)



- A) 9.2 B) 3.6
C) 2.2 D) 1.7

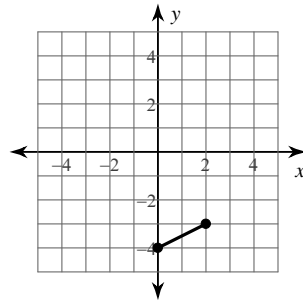


15)



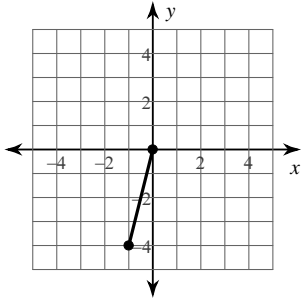
- A) 2.8 B) 3.7
C) 10 D) 2

16)



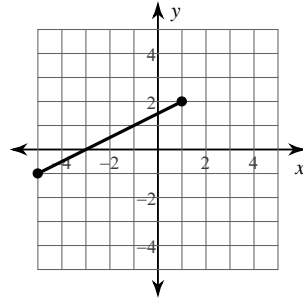
- A) 2.2 B) 3
C) 1.7 D) 7.3

17)



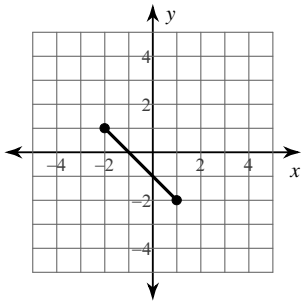
- A) 4.1 B) 3.9
C) 2.2 D) 1.7

18)



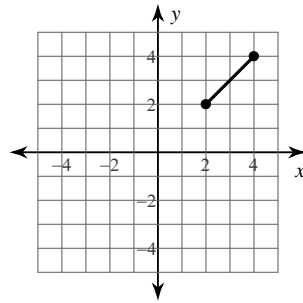
- A) 6.7 B) 3
C) 2.2 D) 4.1

19)



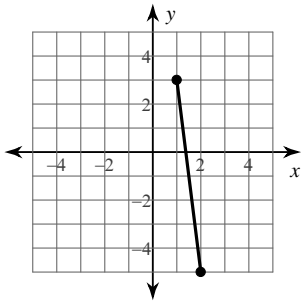
- A) 2.2 B) 4.2
C) 9.2 D) 2.4

20)



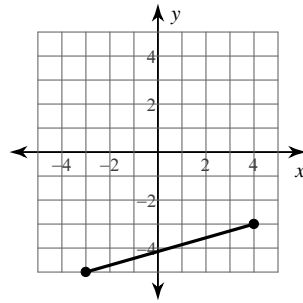
- A) 8.5 B) 2
C) 2.8 D) 12

21)



- A) 8.1 B) 3.6
C) 3 D) 2.2

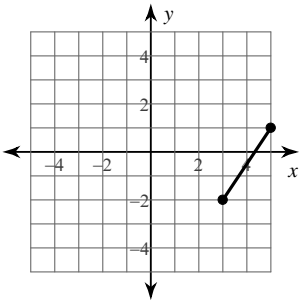
22)



- A) 7.3 B) 7.9
C) 3 D) 8.1

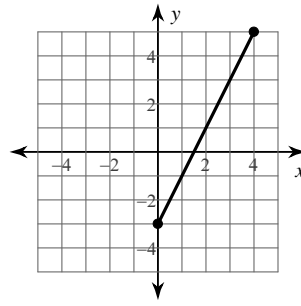


23)



- A) 3
- B) 8.1
- C) 3.6
- D) 2.2

24)



- A) 2
- B) 3.5
- C) 8.9
- D) 8.6



Answers to Assignment (ID: 6)

1) A
5) A
9) A
13) B
17) A
21) A

2) B
6) A
10) A
14) A
18) A
22) A

3) A
7) C
11) B
15) A
19) B
23) C

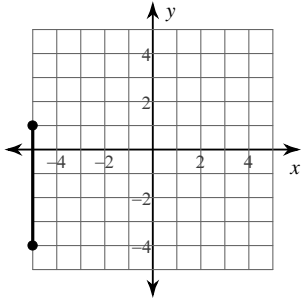
4) A
8) A
12) A
16) A
20) C
24) C



Assignment

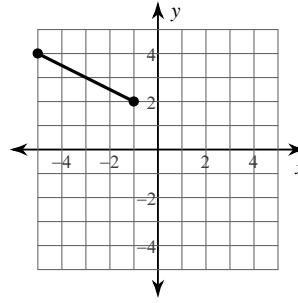
Find the distance between each pair of points. Round your answer to the nearest tenth, if necessary.

1)



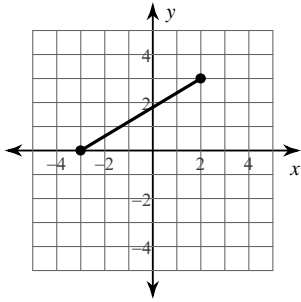
- A) 5
- B) 2.2
- C) 2.6
- D) 10.4

2)



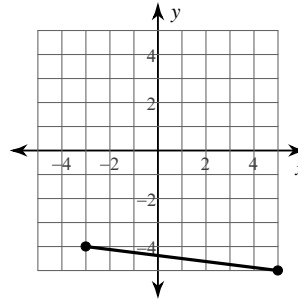
- A) 4.5
- B) 2.4
- C) 8.5
- D) 3.5

3)



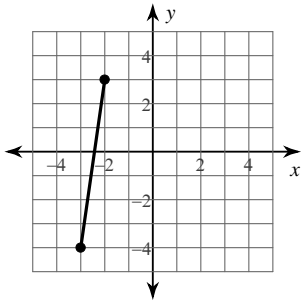
- A) 2.8
- B) 3.2
- C) 5.8
- D) 2

4)



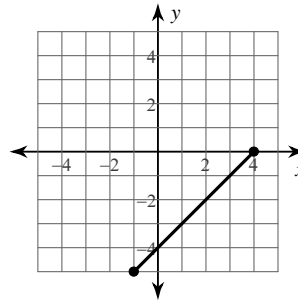
- A) 3
- B) 9.2
- C) 3.3
- D) 8.1

5)



- A) 2.8
- B) 4.9
- C) 2.4
- D) 7.1

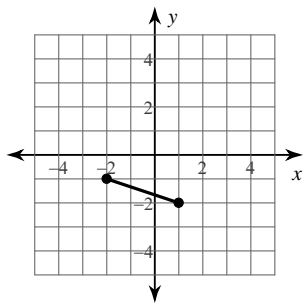
6)



- A) 3.2
- B) 2.8
- C) 7.1
- D) 5.8

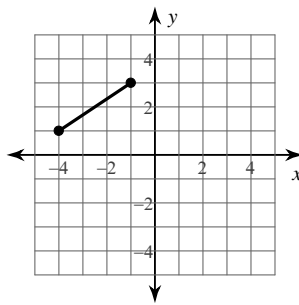


7)



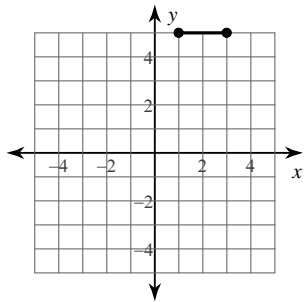
- A) 2 B) 2.8
C) 8 D) 3.2

8)



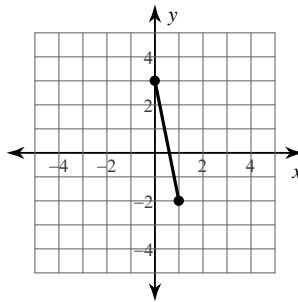
- A) 2.2 B) 3
C) 6.4 D) 3.6

9)



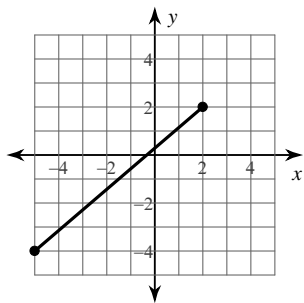
- A) 2.4 B) 1.4
C) 2 D) 10.8

10)



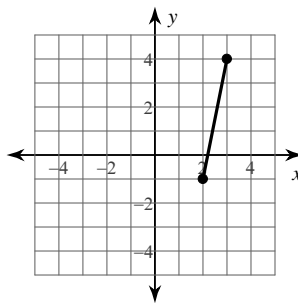
- A) 8.1 B) 5.8
C) 2.4 D) 5.1

11)



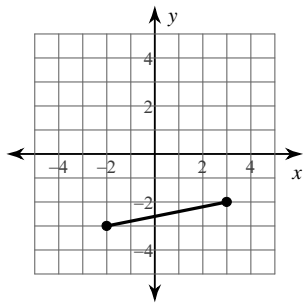
- A) 3.6 B) 2.2
C) 1 D) 9.2

12)



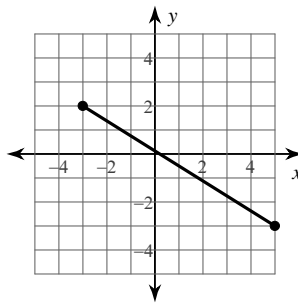
- A) 2.4 B) 2
C) 5.1 D) 5.8

13)



- A) 2.4 B) 5.1
C) 4.9 D) 5.4

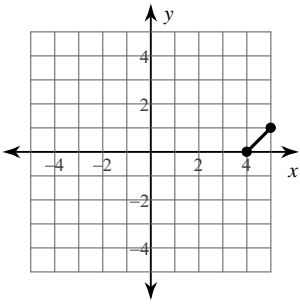
14)



- A) 3.2 B) 9.4
C) 1.7 D) 3.6

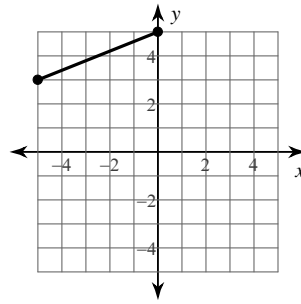


15)



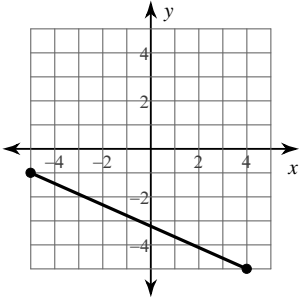
- A) 2.8 B) 9.1
C) 8.9 D) 1.4

16)



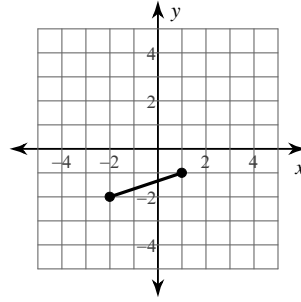
- A) 3.6 B) 5.4
C) 9.4 D) 2.6

17)



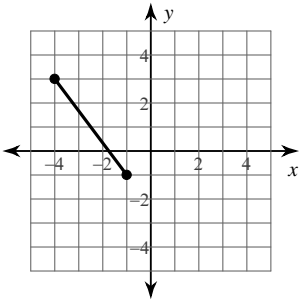
- A) 3.6 B) 5.9
C) 6.1 D) 9.8

18)



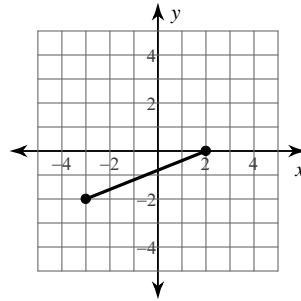
- A) 1.4 B) 2.8
C) 2 D) 3.2

19)



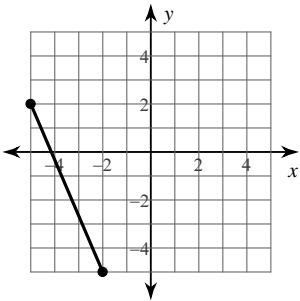
- A) 5 B) 4.6
C) 5.4 D) 2.6

20)



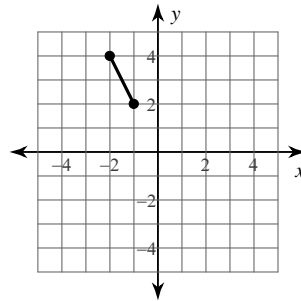
- A) 2.6 B) 1.7
C) 2.2 D) 5.4

21)



- A) 6.7 B) 7.6
C) 3.2 D) 9.8

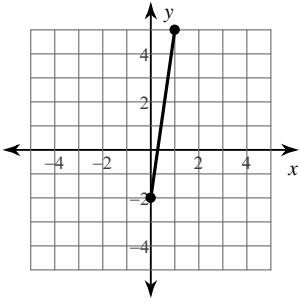
22)



- A) 3 B) 2.2
C) 6.7 D) 1.7

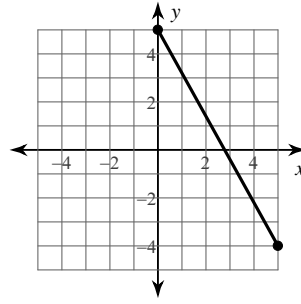


23)



- A) 2.8
- B) 7.1
- C) 3.2
- D) 2.4

24)



- A) 5.1
- B) 4.9
- C) 10.3
- D) 3.7



Answers to Assignment (ID: 7)

- 1) A
- 5) D
- 9) C
- 13) B
- 17) D
- 21) B

- 2) A
- 6) C
- 10) D
- 14) B
- 18) D
- 22) B

- 3) C
- 7) D
- 11) D
- 15) D
- 19) A
- 23) B

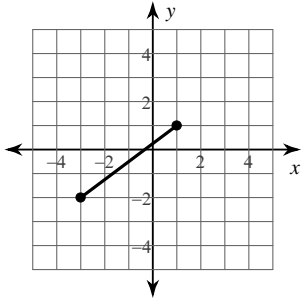
- 4) D
- 8) D
- 12) C
- 16) B
- 20) D
- 24) C



Assignment

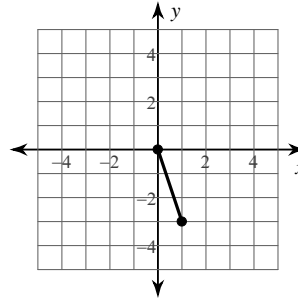
Find the distance between each pair of points. Round your answer to the nearest tenth, if necessary.

1)



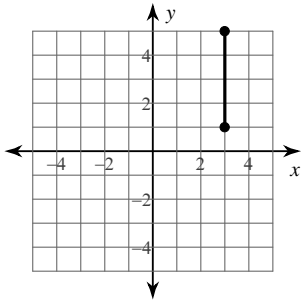
- A) 1
- B) 5
- C) 2.6
- D) 1.7

2)



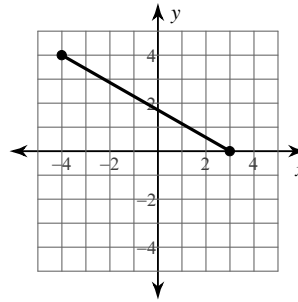
- A) 1.4
- B) 3.2
- C) 2
- D) 4

3)



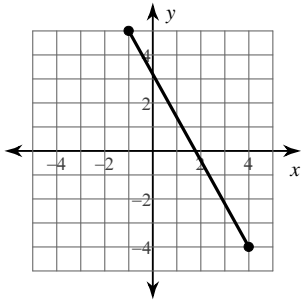
- A) 2
- B) 4
- C) 8.5
- D) 4.1

4)



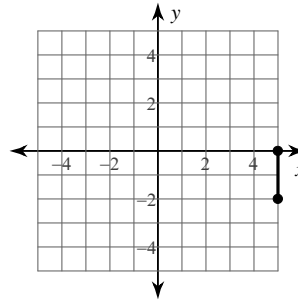
- A) 2.2
- B) 8.1
- C) 3.9
- D) 3.3

5)



- A) 3.2
- B) 3.7
- C) 2.8
- D) 10.3

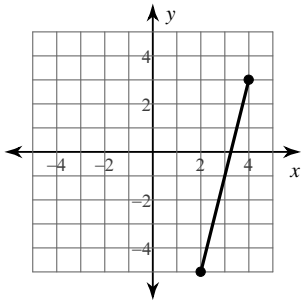
6)



- A) 1.4
- B) 3.5
- C) 2
- D) 10.2

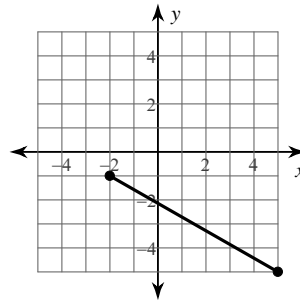


7)



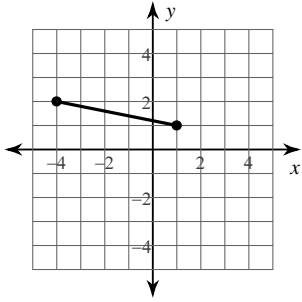
- A) 8.2 B) 6.3
C) 2.8 D) 3.2

8)



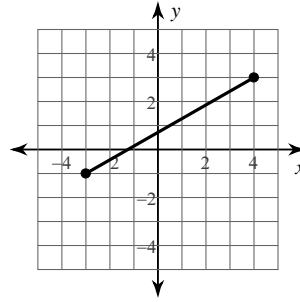
- A) 6.7 B) 5.2
C) 8.1 D) 3.3

9)



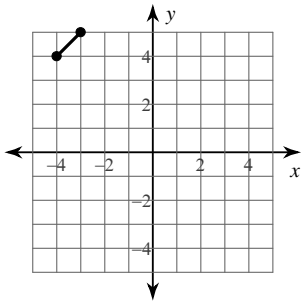
- A) 2.4 B) 2.2
C) 4.2 D) 5.1

10)



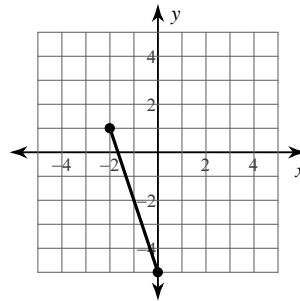
- A) 1.7 B) 3.3
C) 2.2 D) 8.1

11)



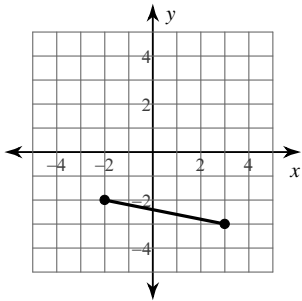
- A) 4 B) 1.4
C) 5.7 D) 6

12)



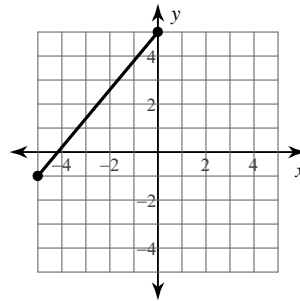
- A) 4.5 B) 2.8
C) 6.3 D) 3.5

13)



- A) 4.9 B) 5.1
C) 2.4 D) 10

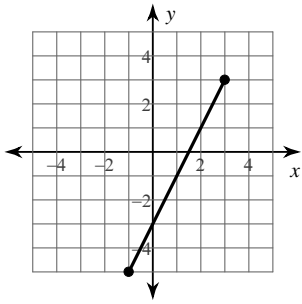
14)



- A) 7.8 B) 9.5
C) 3 D) 3.3

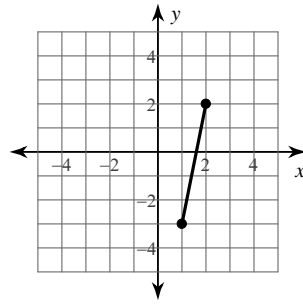


15)



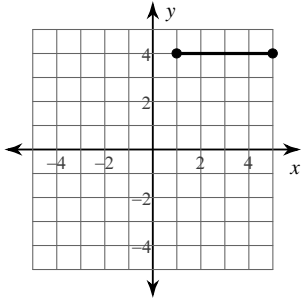
- A) 2.8 B) 3.5
C) 2 D) 8.9

16)



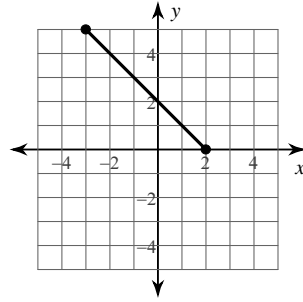
- A) 2 B) 5.1
C) 3.2 D) 2.4

17)



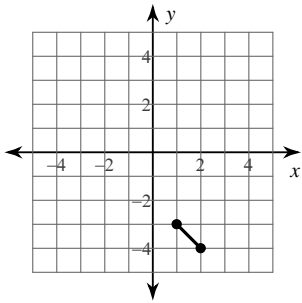
- A) 10 B) 4
C) 5.3 D) 2

18)



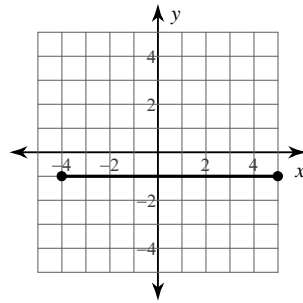
- A) 5.1 B) 3.2
C) 7.1 D) 4.9

19)



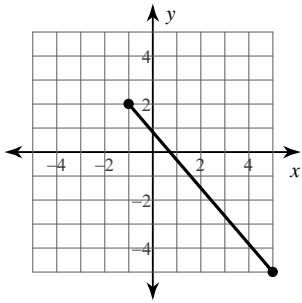
- A) 7.6 B) 6.3
C) 1.4 D) 3.2

20)



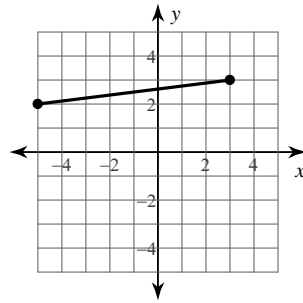
- A) 2.2 B) 3
C) 9 D) 7.8

21)



- A) 2.6 B) 5
C) 9.2 D) 3.6

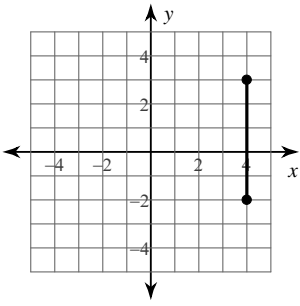
22)



- A) 3 B) 8.1
C) 5.4 D) 2.6

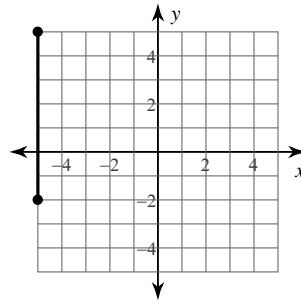


23)



- A) 2.6
- B) 2.2
- C) 8.1
- D) 5

24)



- A) 9.5
- B) 3.6
- C) 2.6
- D) 7



Answers to Assignment (ID: 8)

- 1) B
- 5) D
- 9) D
- 13) B
- 17) B
- 21) C

- 2) B
- 6) C
- 10) D
- 14) A
- 18) C
- 22) B

- 3) B
- 7) A
- 11) B
- 15) D
- 19) C
- 23) D

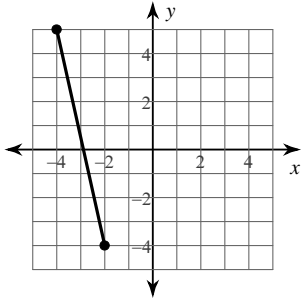
- 4) B
- 8) C
- 12) C
- 16) B
- 20) C
- 24) D



Assignment

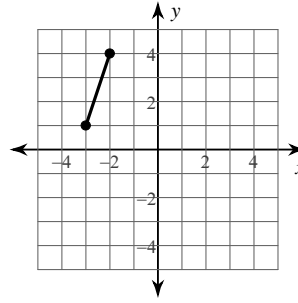
Find the distance between each pair of points. Round your answer to the nearest tenth, if necessary.

1)



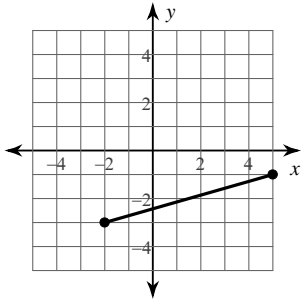
- A) 5.9
- B) 3.3
- C) 6.1
- D) 9.2

2)



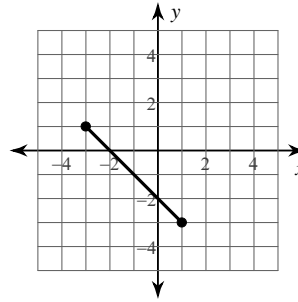
- A) 3.2
- B) 9.5
- C) 7.1
- D) 2

3)



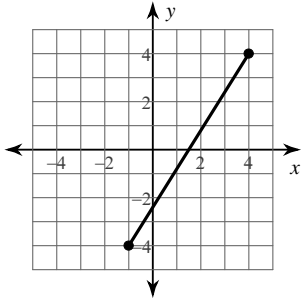
- A) 5
- B) 7.3
- C) 3
- D) 2.6

4)



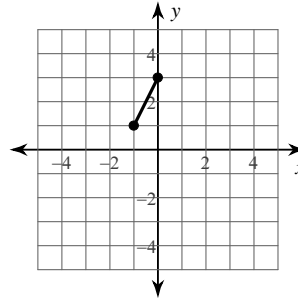
- A) 4.5
- B) 2.8
- C) 5.7
- D) 11.3

5)



- A) 3
- B) 1.7
- C) 3.6
- D) 9.4

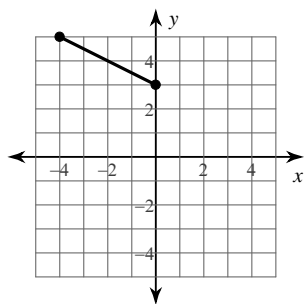
6)



- A) 3
- B) 4.1
- C) 1.7
- D) 2.2

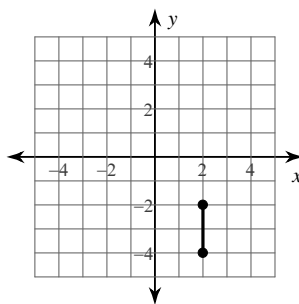


7)



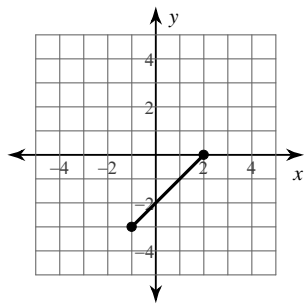
- A) 3.5 B) 4.5
C) 8.9 D) 2.4

8)



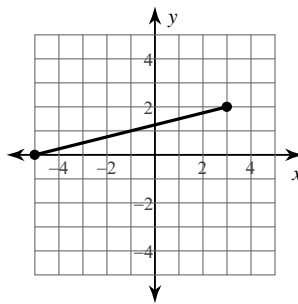
- A) 2 B) 3.2
C) 7.2 D) 1.4

9)



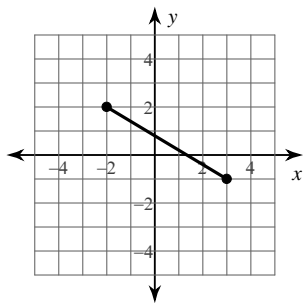
- A) 3.2 B) 2
C) 4.2 D) 2.4

10)



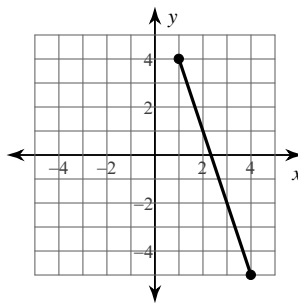
- A) 3.2 B) 2.4
C) 8.2 D) 5.1

11)



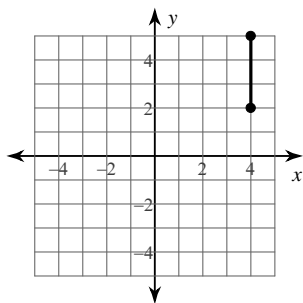
- A) 2.2 B) 2.8
C) 1.4 D) 5.8

12)



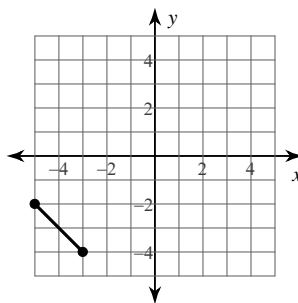
- A) 4.9 B) 5.1
C) 3.5 D) 9.5

13)



- A) 3.9 B) 1.7
C) 10.6 D) 3

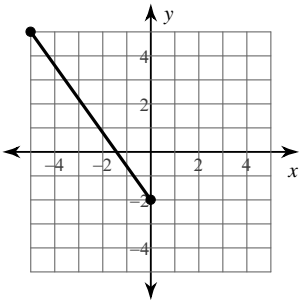
14)



- A) 5.3 B) 2
C) 10 D) 2.8

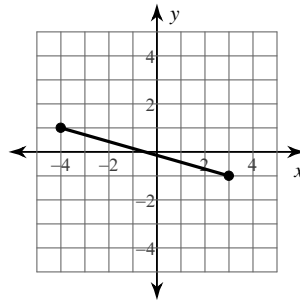


15)



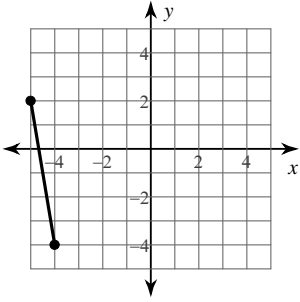
- A) 4 B) 3.5
C) 8.6 D) 5.8

16)



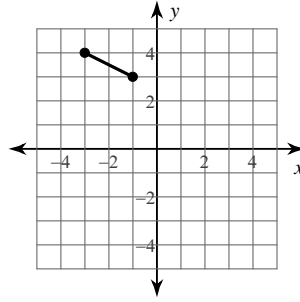
- A) 1 B) 3
C) 7.3 D) 2.2

17)



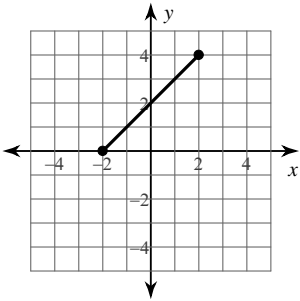
- A) 8.8 B) 6.1
C) 2.6 D) 9.2

18)



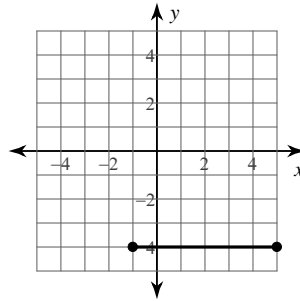
- A) 3.3 B) 8.1
C) 2.2 D) 1.7

19)



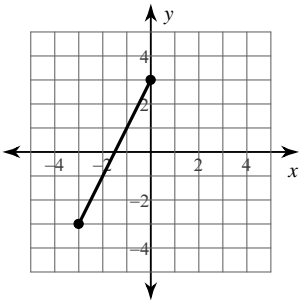
- A) 5.7 B) 2
C) 2.8 D) 4

20)



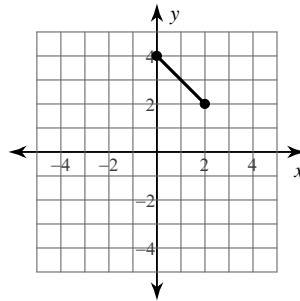
- A) 3.5 B) 6.9
C) 2.4 D) 6

21)



- A) 6.7 B) 3
C) 1.7 D) 10.3

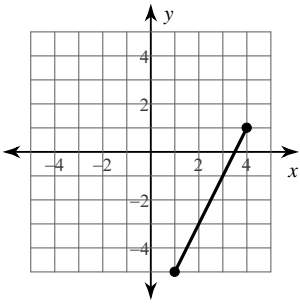
22)



- A) 6.3 B) 5.7
C) 2 D) 2.8

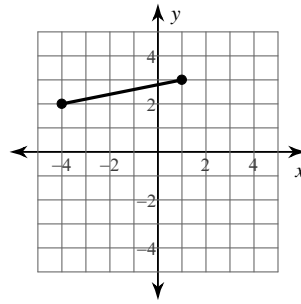


23)



- A) 3
- B) 6.7
- C) 6.4
- D) 7.8

24)



- A) 5.1
- B) 5.8
- C) 2.4
- D) 2.8



Answers to Assignment (ID: 9)

1) D
5) D
9) C
13) D
17) B
21) A

2) A
6) D
10) C
14) D
18) C
22) D

3) B
7) B
11) D
15) C
19) A
23) B

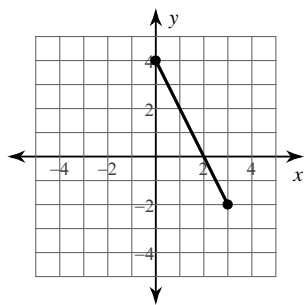
4) C
8) A
12) D
16) C
20) D
24) A



Assignment

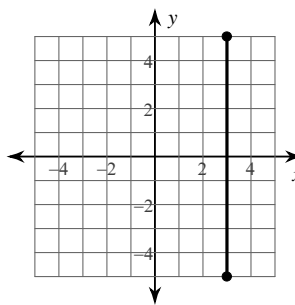
Find the distance between each pair of points. Round your answer to the nearest tenth, if necessary.

1)



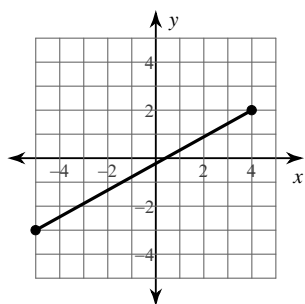
- A) 6.7 B) 2.2
C) 3.6 D) 3

2)



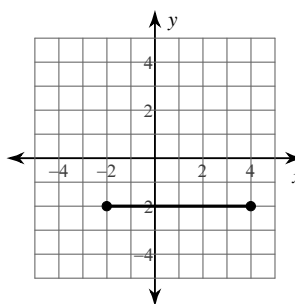
- A) 3 B) 6
C) 3.2 D) 10

3)



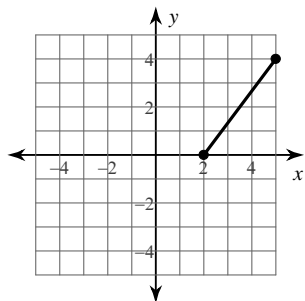
- A) 10.3 B) 3.7
C) 2 D) 1.4

4)



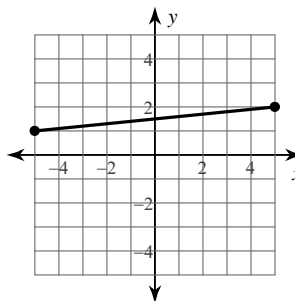
- A) 6 B) 2.4
C) 3.5 D) 4.5

5)



- A) 5 B) 8.1
C) 2.6 D) 1.7

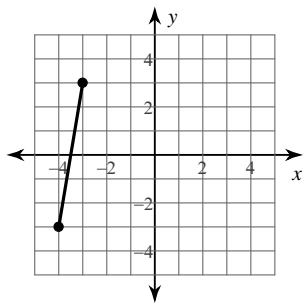
6)



- A) 6.3 B) 10.1
C) 3.3 D) 3

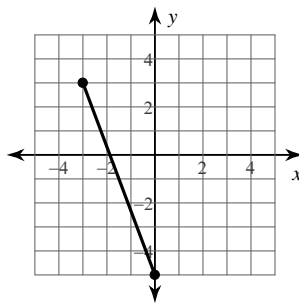


7)



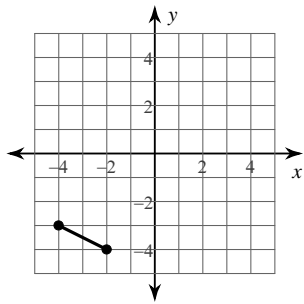
- A) 7 B) 2.6
C) 3.6 D) 6.1

8)



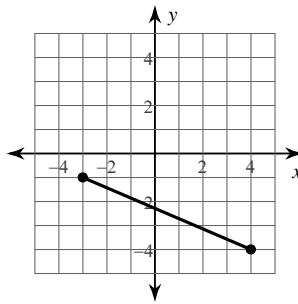
- A) 8.5 B) 3.6
C) 3.3 D) 2.2

9)



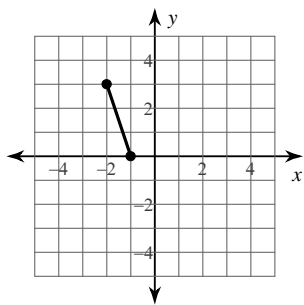
- A) 2.2 B) 1.7
C) 3.6 D) 9.2

10)



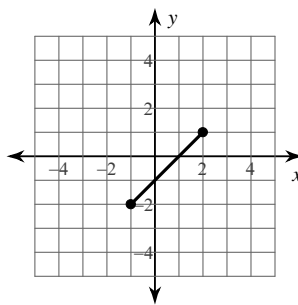
- A) 7.6 B) 5.1
C) 3.2 D) 4.9

11)



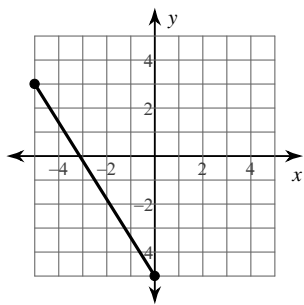
- A) 2.4 B) 4.2
C) 2 D) 3.2

12)



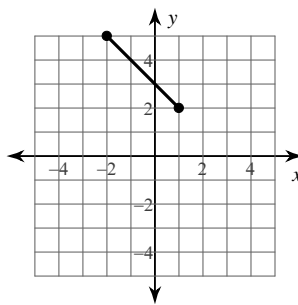
- A) 4.2 B) 1.4
C) 2.4 D) 8

13)



- A) 5.4 B) 3.6
C) 2.8 D) 9.4

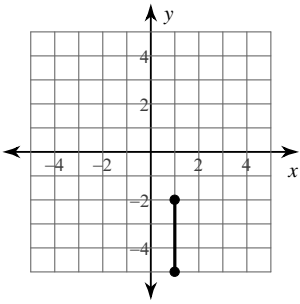
14)



- A) 4.2 B) 2.8
C) 2.4 D) 7.1

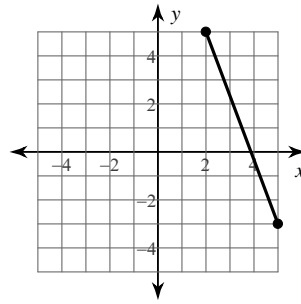


15)



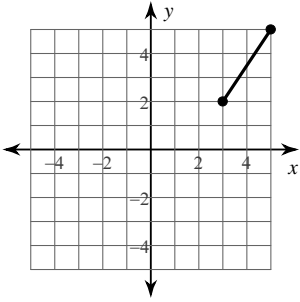
- A) 6.7 B) 1.7
C) 3 D) 7.6

16)



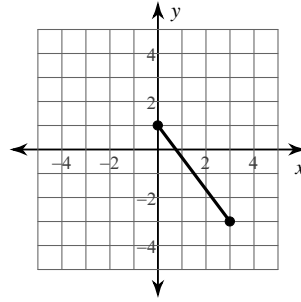
- A) 3.3 B) 7.3
C) 6.7 D) 8.5

17)



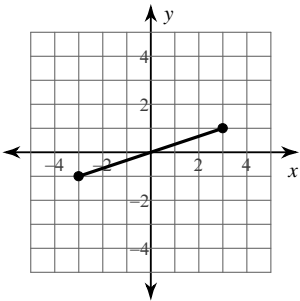
- A) 2.2 B) 10.6
C) 1 D) 3.6

18)



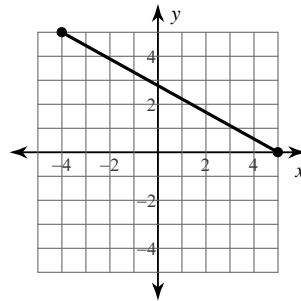
- A) 5 B) 2.6
C) 2.2 D) 3.6

19)



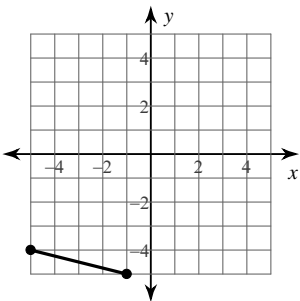
- A) 2.8 B) 6.3
C) 7.1 D) 2

20)



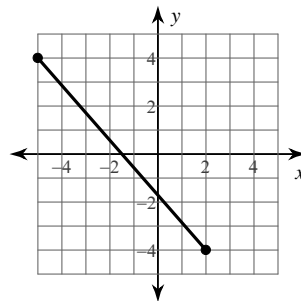
- A) 3.7 B) 5.1
C) 10.3 D) 4.9

21)



- A) 2.2 B) 10.8
C) 4.1 D) 6.7

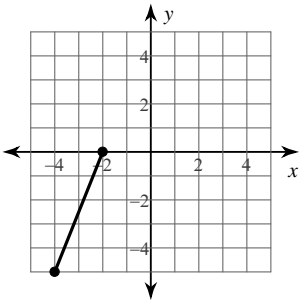
22)



- A) 3.9 B) 3
C) 10.6 D) 2.8

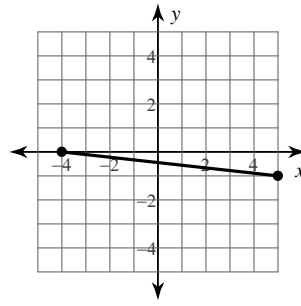


23)



- A) 5.4
- B) 7.8
- C) 1.7
- D) 2.6

24)



- A) 7.1
- B) 3.2
- C) 1.4
- D) 9.1



Answers to Assignment (ID: 10)

1) A
5) A
9) A
13) D
17) D
21) C

2) D
6) B
10) A
14) A
18) A
22) C

3) A
7) D
11) D
15) C
19) B
23) A

4) A
8) A
12) A
16) D
20) C
24) D

